













# An aimsir ar fud an domhain

Éist leis an mír agus meitseáil an chathair leis an aimsir. Scríobh an litir chúí sa spás ceart. Lean an eochair atá ag bun an leathanaigh.

- |                            |   |   |
|----------------------------|---|---|
| 1. Baile Átha Cliath _____ | a) 35°C / 95° F   |    |
| 2. Krakow _____            | b) 6°C / 42.8°F   |    |
| 3. Pisa _____              | c)   |   |
| 4. Londain _____           | d)   |   |
| 5. Barcelona _____         | e) 6°C / 42.8°F   |   |
| 6. Montréal _____          | f) 0°C / 32°F   |   |
| 7. Sydney _____            | g) 0°C / 32°F   |    |
| 8. St Petersburg _____     | h) 24°C / 75.2°F  |    |
| 9. Glaschú _____           | i) 0°C / 32°F   |    |



scamallach ag cur sneachta

grianmhar

gaofar

ag cur báistí

0°C / 32°F = an-fhuar

6°C / 42.8°F = fuar

24°C / 75.2°F = te

35°C / 95° F = an-te